



BANYAN TREE SCHOOL, BHOPAL HOLIDAY HOMEWORK

SESSION--(2020-21)



NAME OF STUDENT: _____

CLASS: III

TEACHERS NAME/SIGN: _____

SUMMER HOLIDAY HOMEWORK (2020-2021)

CLASS-III

ENGLISH

Q1. Draw flow chart of parts of speech on A4 sheet.

Q2. Learn and write definition of Noun, Pronoun and Verb.

Q3. Write 10 -10 examples of common noun and proper noun.

Q4. Prepare word bank -write two words daily from dictionary with meaning and make simple sentence of each.

Q5. Observe the various animals around you. Describe them in five sentences. You may write about:

*Their size- big or small

*Their colour

*Their food habits.

*Their homes

*Their movements- fly, hop, and crawl.

Reading - two pages daily.

Writing 1 page daily.

हिंदी

1) कोई भी दस शब्दों के विलोम शब्द तथा कोई भी दस शब्दों के पर्यायवाची शब्द लिखिए ।

2) निम्नलिखित शब्दों के अर्थ लिखकर वाक्य बनाइए ।

मधुर, निराला, ज्योति, शोभा, शीतलता, कर्म, मेघ, सरसा, शुद्धता, सेवकचर

3) सुंदर-सुंदर रंग आकार वाली तितलियों के चित्र एक शीट पर बनाकर तितलियों के बारे में लिखिए ।

EVS

1. Paste the photographs of your nearest paternal relatives and maternal relatives on a chart paper and writes their names.
2. List down the activities which you do at home to help your parents.
3. In what ways you are different from your parents? How are you the same?
4. What are three things you have that your parents did not have when they were growing up?

MATHS

CONVERT TO STANDARD FORM 4 DIGITS SHEET 1

Use your place value knowledge to find the missing numbers.

- 1) 5 THOUSANDS + 7 HUNDREDS + 2 TENS = _____
- 2) 3 THOUSANDS + 8 TENS + 7 ONES = _____
- 3) 4 THOUSANDS + 3 HUNDREDS + 9 ONES = _____
- 4) 6 THOUSANDS + 2 HUNDREDS + 56 ONES = _____
- 5) 1 THOUSAND + 8 HUNDREDS + 34 ONES = _____
- 6) 7 THOUSANDS + 5 TENS + 4 ONES = _____
- 7) 12 HUNDREDS + 8 TENS + 7 ONES = _____
- 8) 14 HUNDREDS + 3 TENS + 4 ONES = _____
- 9) 9 THOUSANDS + 21 TENS + 8 ONES = _____
- 10) 3 HUNDREDS + 7 TENS + 2 THOUSANDS = _____
- 11) 8 TENS + 3 HUNDREDS + 5 THOUSANDS = _____
- 12) 72 ONES + 2 HUNDREDS + 4 THOUSANDS = _____
- 13) 16 HUNDREDS + 93 ONES = _____
- 14) 5 TENS + 7 THOUSANDS + 3 ONES = _____
- 15) 4 HUNDREDS + 5 THOUSANDS + 8 ONES = _____

Write a 4-digit number in expanded form.

Grade 3 Place Value Worksheet

Example: $5,836 = 5 \times 1,000 + 8 \times 100 + 3 \times 10 + 6 \times 1$

Write the number in expanded form.

1. 5,057 _____
2. 7,684 _____
3. 2,182 _____
4. 2,667 _____
5. 7,386 _____
6. 6,058 _____
7. 3,233 _____
8. 1,111 _____
9. 2,381 _____
10. 3,785 _____

Arrange the following numbers both in Ascending & Descending Order.

1) 56499, 32566, 12988, 45377, 14300

Ascending Order: _____

Descending Order: _____

2) 17864, 32009, 96012, 71293, 67009

Ascending Order: _____

Descending Order: _____

3) 55443, 55663, 55112, 55776, 55996

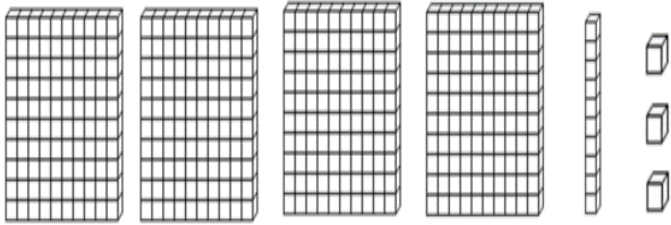
Ascending Order: _____

Descending Order: _____

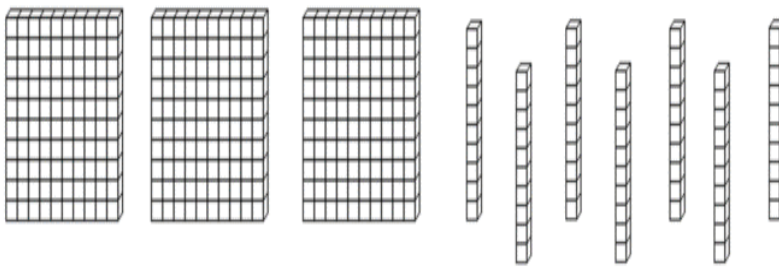
4) 12786, 16778, 16543, 11897, 13009

Ascending Order: _____


Descending Order: _____



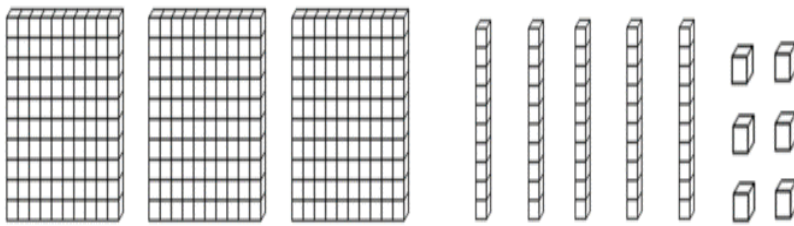
How many?



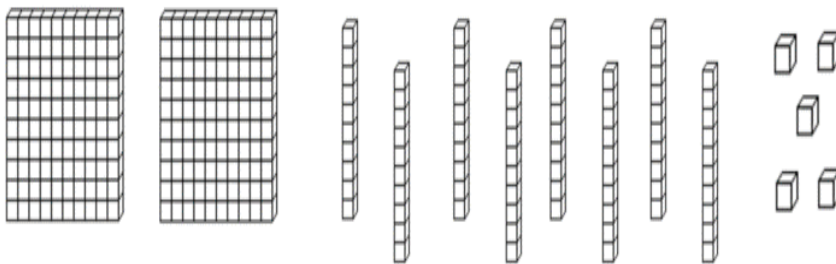
How many?



How many?



How many?



How many?

Addition

$$\begin{array}{r} + 996 \\ + 978 \\ \hline \end{array}$$

$$\begin{array}{r} + 896 \\ + 968 \\ \hline \end{array}$$

$$\begin{array}{r} + 795 \\ + 998 \\ \hline \end{array}$$

$$\begin{array}{r} + 598 \\ + 958 \\ \hline \end{array}$$

$$\begin{array}{r} + 597 \\ + 938 \\ \hline \end{array}$$

$$\begin{array}{r} + 596 \\ + 928 \\ \hline \end{array}$$

$$\begin{array}{r} + 595 \\ + 968 \\ \hline \end{array}$$

$$\begin{array}{r} + 594 \\ + 978 \\ \hline \end{array}$$

$$\begin{array}{r} + 593 \\ + 998 \\ \hline \end{array}$$

$$\begin{array}{r} + 599 \\ + 978 \\ \hline \end{array}$$

$$\begin{array}{r} + 678 \\ + 543 \\ \hline \end{array}$$

$$\begin{array}{r} + 876 \\ + 555 \\ \hline \end{array}$$

Subtraction

$$\begin{array}{r} - 926 \\ - 658 \\ \hline \end{array}$$

$$\begin{array}{r} - 835 \\ - 368 \\ \hline \end{array}$$

$$\begin{array}{r} - 956 \\ - 598 \\ \hline \end{array}$$

$$\begin{array}{r} - 923 \\ - 567 \\ \hline \end{array}$$

$$\begin{array}{r} - 753 \\ - 378 \\ \hline \end{array}$$

$$\begin{array}{r} - 823 \\ - 386 \\ \hline \end{array}$$

$$\begin{array}{r} - 925 \\ - 568 \\ \hline \end{array}$$

$$\begin{array}{r} - 953 \\ - 368 \\ \hline \end{array}$$

$$\begin{array}{r} - 763 \\ - 398 \\ \hline \end{array}$$

$$\begin{array}{r} - 932 \\ - 778 \\ \hline \end{array}$$

$$\begin{array}{r} - 678 \\ - 593 \\ \hline \end{array}$$

$$\begin{array}{r} - 836 \\ - 567 \\ \hline \end{array}$$

DAILY WORK

Learn and write tables from 2 to 15.